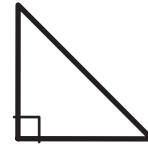


The Magical Tangram Pieces

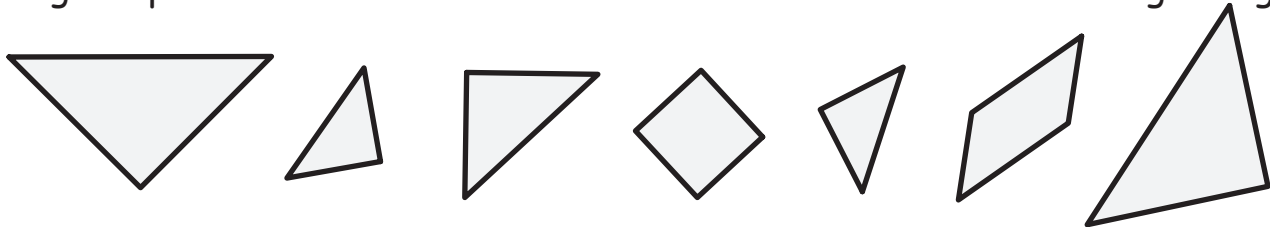
4. The seven tangram pieces look like this:



Except for the parallelogram, all of the pieces have at least one right angle (a square angle, or angle with 90°). A right angle is marked like this:




Can you find the right angles now? Mark all you see. (note: these are the same tangram pieces but rotated a little to make it harder to see the right angles.)



5. How many right angles are in the square? _____

6. How many right angles can you find inside the tangram square? Mark all the right angles you see now.



How did you do?

1-5 Keep looking!

6-9 Good!

10-12 Very good!

13 Awesome!